

1 Reken uit.

a $856 - 4 = \underline{\quad}$ **b** $647 - 3 = \underline{\quad}$ **c** $738 - 2 = \underline{\quad}$ **d** $919 - 6 = \underline{\quad}$
 $856 - 40 = \underline{\quad}$ $647 - 30 = \underline{\quad}$ $738 - 20 = \underline{\quad}$ $919 - 60 = \underline{\quad}$
 $856 - 400 = \underline{\quad}$ $647 - 300 = \underline{\quad}$ $738 - 200 = \underline{\quad}$ $919 - 600 = \underline{\quad}$

2 Reken uit.

a $421 + 365 = \underline{\quad}$ **b** $346 + 80 + 3 = \underline{\quad}$ **c** $512 + 188 = \underline{\quad}$
 $247 + 132 = \underline{\quad}$ $531 + 90 + 8 = \underline{\quad}$ $351 + 249 = \underline{\quad}$
 $563 + 231 = \underline{\quad}$ $764 + 50 + 6 = \underline{\quad}$ $687 + 313 = \underline{\quad}$
 $635 + 342 = \underline{\quad}$ $682 + 70 + 9 = \underline{\quad}$ $465 + 435 = \underline{\quad}$

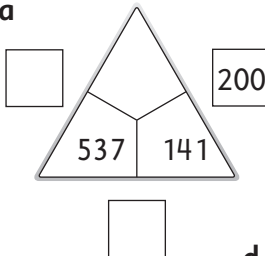
3 Reken uit.

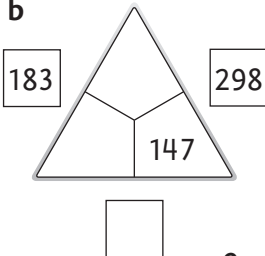
a $4 \times 9 = \underline{\quad}$ **b** $7 \times 2 = \underline{\quad}$ **c** $8 \times 7 = \underline{\quad}$ **d** $6 \times 6 = \underline{\quad}$
 $8 \times 6 = \underline{\quad}$ $4 \times 5 = \underline{\quad}$ $6 \times 9 = \underline{\quad}$ $7 \times 7 = \underline{\quad}$
 $5 \times 7 = \underline{\quad}$ $10 \times 3 = \underline{\quad}$ $5 \times 10 = \underline{\quad}$ $8 \times 8 = \underline{\quad}$
 $3 \times 8 = \underline{\quad}$ $9 \times 4 = \underline{\quad}$ $8 \times 9 = \underline{\quad}$ $9 \times 9 = \underline{\quad}$

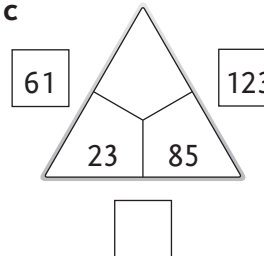
4 Vul in.

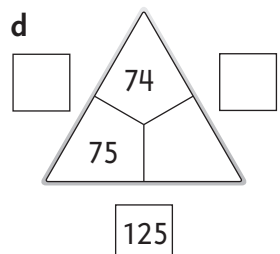
a	aantal taarten	1	3	4	6	8	10	11	13
	aantal kaarsjes	8							
b	aantal handen	2	4	6	7	8	9	10	12
	aantal vingers	8							

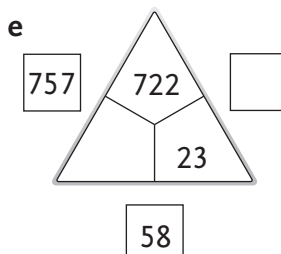
5 Vul in.

a 

b 

c 

d 

e 

1

Betaal gepast.

Gebruik zo weinig mogelijk munten en briefjes.

Schrijf het zo op: € 1,25 = 1 euro + 20 c + 5 c.

Je moet betalen:	Je geeft:
€ 1,15	
€ 2,10	
€ 1,75	
€ 1,90	
€ 2,35	
€ 2,70	
€ 2,30	
€ 3,65	
€ 5,15	
€ 5,85	
€ 13,50	
€ 14,85	
€ 15,60	
€ 16,40	
€ 17,70	

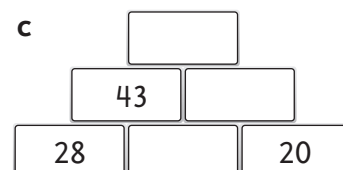
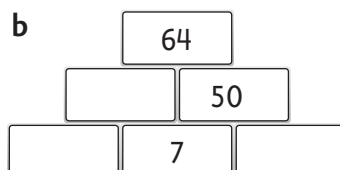
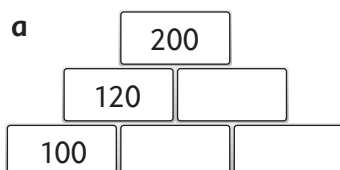
2

Hoeveel krijg je terug?

Je hebt:	Je moet betalen:	Je krijgt terug:
€ 5	€ 3,40	
€ 5	€ 2,75	
€ 10	€ 7,20	
€ 10	€ 5,10	
€ 20	€ 12,30	
€ 20	€ 9,50	

3

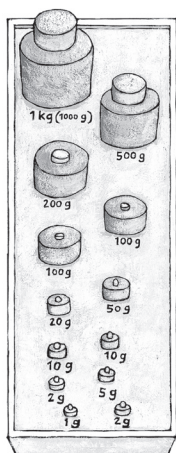
Maak de getallenmuurtjes.



1 Reken uit.

- | | |
|--------------------------------|--------------------------------|
| a $6 \times 14 =$ _____ | b $5 \times 12 =$ _____ |
| $5 \times 13 =$ _____ | $9 \times 15 =$ _____ |
| $8 \times 12 =$ _____ | $7 \times 18 =$ _____ |
| $7 \times 15 =$ _____ | $3 \times 13 =$ _____ |
| $4 \times 17 =$ _____ | $8 \times 14 =$ _____ |
| $6 \times 16 =$ _____ | $6 \times 15 =$ _____ |
| $2 \times 18 =$ _____ | $2 \times 19 =$ _____ |
| $4 \times 13 =$ _____ | $8 \times 11 =$ _____ |

2 Welke gewichten heb je nodig?



- 167 g = _____
- 817 g = _____
- 522 g = _____
- 354 g = _____
- 798 g = _____
- 486 g = _____
- 673 g = _____
- 1265 g = _____

**3 Welke gewichten wegen samen 1 kg?
Bedenk 5 manieren.**

_____	_____
_____	_____
_____	_____

**4 Welke gewichten wegen samen 500 g?
Bedenk 5 manieren.**

_____	_____
_____	_____
_____	_____

1 Vul aan tot 1 liter.

- a 900 ml + _____ = 1 l
 750 ml + _____ = 1 l
 350 ml + _____ = 1 l
 325 ml + _____ = 1 l
 575 ml + _____ = 1 l

- b 50 cl + _____ = 1 l
 5 cl + _____ = 1 l
 20 cl + _____ = 1 l
 97 cl + _____ = 1 l
 18 cl + _____ = 1 l

2 Maak de rijen af.

a 

b 

c 

d 

3 Hoeveel kilometer is er gereden?

a **begin**  **eind** 

b **begin**  **eind** 

c **begin**  **eind** 

d **begin**  **eind** 
